










Name \_\_\_\_\_



# Graphing on a Grid

Directions: Read the directions. Draw each picture where it belongs on the grid.

Go over 5, up 1.		Go over 2, up 7.	
Go over 8, up 4.		Go over 7, up 2.	
Go over 1, up 9.		Go over 3, up 5.	
Go over 6, up 6.		Go over 10, up 5.	
Go over 4, up 8.		Go over 9, up 10.	